

Name: _____

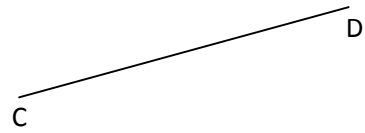

Date: _____

Period: _____

Mr. Valentino

Constructions – Line Segments Homework


1) Construct a line segment congruent to each given line segment.



2) Construct a line segment whose length is equal to the sum of the lengths of the given line segments.



3) Construct a line segment whose length is equal to the difference of the lengths of the given line segments.



4) Construct a line segment the given number of times longer than the given segment.

2 times as long:

3 times as long:

