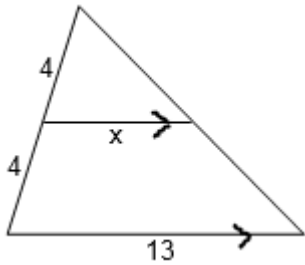
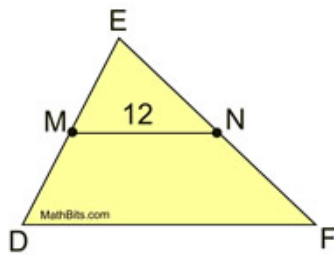


1. What is the value of x ? BE CAREFUL!

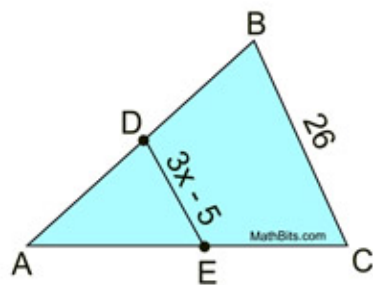


2.



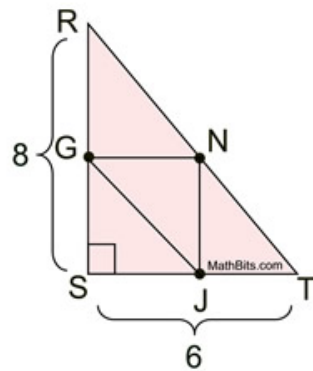
Given M, N midpoints.
 $MN = 12$
 Find DF .

3.



Given D, E midpoints.
 $DE = 3x - 5$
 $AB = 26$
 Find x .

4.



Given right $\triangle RST$.
 G, N, J midpoints.
 $ST = 6$; $RS = 8$
 Find perimeter of $\triangle GNJ$.