

Find each angle measure to the nearest degree.

1) $\tan A = 2.0503$

2) $\cos Z = 0.1219$

3) $\tan Y = 0.6494$

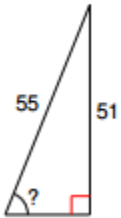
4) $\sin U = 0.8746$

5) $\cos V = 0.6820$

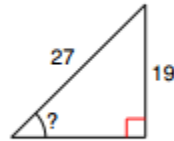
6) $\sin C = 0.2756$

Find the measure of the indicated angle to the nearest degree.

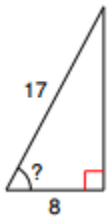
7)



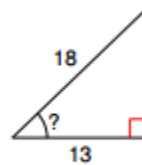
8)



15)



16)



12)

